


Conquer the STAAR Test: Your Ultimate Success Guide

Unlock Your Potential with Targeted Practice

Are you gearing up for the STAAR Test and feeling the pressure to perform at your best? Look no further! Our comprehensive practice questions and expert exam review are meticulously crafted to provide you with the ultimate preparation for this crucial assessment. With our resources, you'll gain a deep understanding of the tested concepts, strengthen your test-taking skills, and increase your confidence to excel on exam day.



STAAR Grade 5 Reading Assessment Flashcard Study System: STAAR Test Practice Questions & Exam Review for the State of Texas Assessments of Academic Readiness

by NYSTCE Exam Secrets Test Prep Team

★★★★★ 5 out of 5

Language : English
File size : 215 KB
Text-to-Speech : Enabled
Screen Reader : Supported
Enhanced typesetting : Enabled
Print length : 128 pages



A Comprehensive Guide to STAAR Success

Our practice questions cover every aspect of the STAAR Test, including:

- Reading: Fiction and Nonfiction comprehension, vocabulary, and analysis
- Mathematics: Number sense, algebra, geometry, and data analysis
- Writing: Composition, grammar, and vocabulary
- Science: Physical, earth, and life sciences
- Social Studies: History, geography, economics, and government

Each practice question is meticulously designed to mirror the format and difficulty level of the actual STAAR Test. By working through our questions, you'll identify areas where you excel and pinpoint concepts that need further attention, allowing you to focus your studies effectively.

Expert Exam Review: Your Key to Success

Complementing our practice questions, our expert exam review provides an in-depth analysis of the STAAR Test, including:

- Test structure and format
- Common question types and strategies
- Tips for managing time and pacing
- Proven test-taking techniques

Our team of experienced educators and test preparation specialists have carefully analyzed the STAAR Test to provide you with the most up-to-date and effective exam strategies. By utilizing our expert guidance, you'll gain the confidence and skills necessary to tackle the test with ease and maximize your score.

Benefits of Our Comprehensive Preparation

- Increased confidence and reduced test anxiety
- Enhanced understanding of tested concepts
- Improved test-taking skills and strategies
- Identification of strengths and weaknesses
- Personalized study plan for targeted improvement
- Higher STAAR Test scores and improved academic performance

Free Download Your Success Today

Don't delay your preparation for the STAAR Test. Free Download our comprehensive practice questions and expert exam review today and start your journey towards success. With our resources, you'll gain the knowledge, skills, and confidence necessary to excel on exam day and achieve your academic goals. Invest in your future and secure your path to success with our unparalleled STAAR Test preparation materials.

Contact us at or visit our website at [website address] to place your Free Download and unlock your potential with our comprehensive STAAR Test practice questions and exam review.

Your success on the STAAR Test begins here. Take the first step towards your academic triumph today!

1 Three friends will equally share the six candies shown below.



What fraction of the candies will each friend get?

- A $\frac{2}{3}$ B $\frac{3}{8}$ C $\frac{1}{6}$ D $\frac{4}{9}$

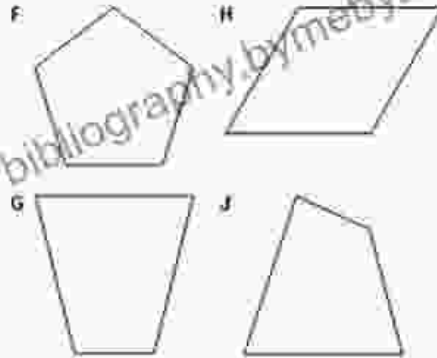
2 Square tiles cover the floor of an office. There are 15 rows of tiles. There are 8 tiles in each row. If each tile has an area of 1 square foot, what is the area of the entire floor?

- F 144 square feet H 128 square feet
G 24 square feet J 48 square feet

4 Dante drew a quadrilateral.

- The figure was not a rhombus.
- The figure was not a rectangle.
- The figure was not a trapezoid.

Which could be the quadrilateral Dante drew?







3 Ms. Morales offers free tutoring to her students every day after school and on Saturday morning. The frequency table below shows how many times per week her students attend.

Free Tutoring

Number of Times	0	1	2	3	4	5	6
Frequency							

Which dot plot represents this information?



STAAR Grade 5 Reading Assessment Flashcard Study System: STAAR Test Practice Questions & Exam Review for the State of Texas Assessments of Academic Readiness

by NYSTCE Exam Secrets Test Prep Team

- ★★★★★ 5 out of 5
- Language : English
- File size : 215 KB
- Text-to-Speech : Enabled


Screen Reader : Supported

Enhanced typesetting: Enabled

Print length : 128 pages


FREE

DOWNLOAD E-BOOK



Smedley Butler: The Marines and the Making and Breaking of America's Empire

: A Marine's Journey Smedley Butler was born on July 31, 1881, in West Chester, Pennsylvania. He joined the Marine Corps in 1898, at the age of 16,...



Ischia, Capri, Sorrento, Positano, And Amalfi: An International Walking Guide

Explore the Breathtaking Beauty of Italy's Islands and Amalfi Coast on Foot This comprehensive walking guidebook provides detailed descriptions of...